

Maths Year 1

Monday 20th July – Friday 24th July

It is the last week of term! We are really proud of all you have achieved at home this term, well done! We thought it would be nice to have some Summer themed maths problems to work through this week. We haven't put an activity each day as we thought you might like to pick and choose each day which one you fancy doing. It is totally up to you. Have fun 😊

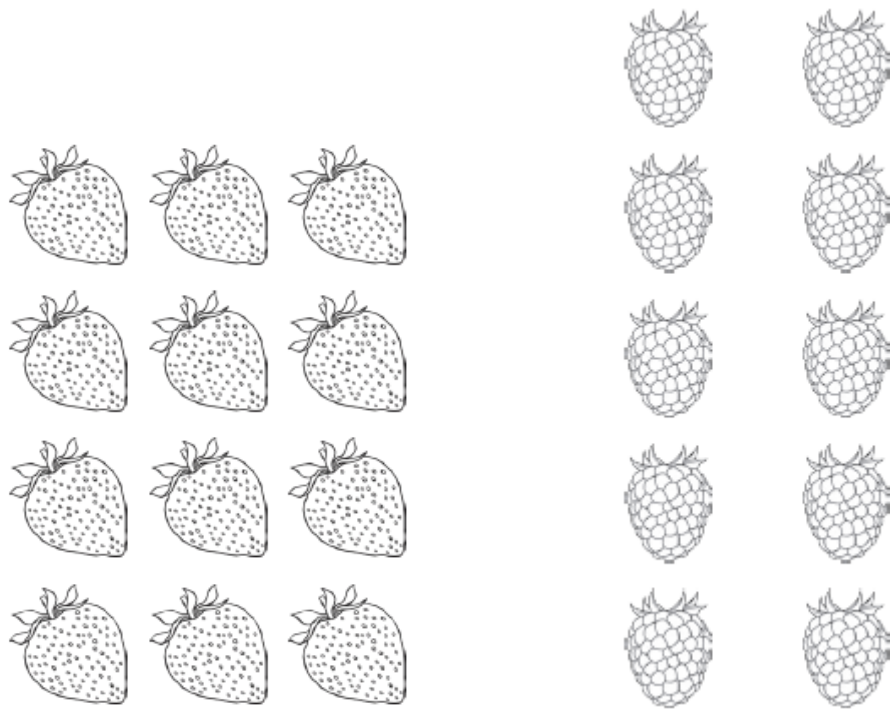
1. Count the Summer objects. Draw the object, write the numeral and write the number in words.




2. Draw the tens and ones shown on the boats. Draw lines for the tens and dots for the ones.



3. Count up the Summer fruits, then find half of that number:

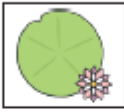









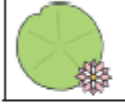
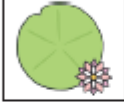
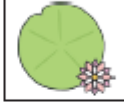
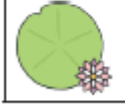
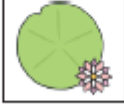
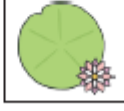



Now find $\frac{1}{4}$ of these numbers:



4. Help the frog through the maze, counting in 2s.




	0	2	4	6	8	2	8	
10			8			10		12
	2	14	16	14	12	46	4	
12			18			16		34
10	8	4	44	20	22	24	32	6
2		22		30		26		36
6	4	36	34	32	30	28	14	2
20		38		28			8	
2	26	40	32	30	28		2	
24		42		46			54	
2	6	44	46	48	50		52	



5. Problem solving:

5 children are on a picnic. Each child eats 2 apples. How many apples are eaten?



Answer:

8 children are on a picnic. Each child eats 2 sandwiches. How many sandwiches are eaten?



Answer:

3 children are on a picnic. Each child eats 5 biscuits. How many biscuits are eaten?



Answer:

6. Play lots of different board games with your family.

Have fun!